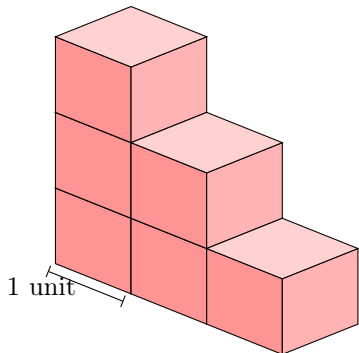


VOLUME

A DEFINITION

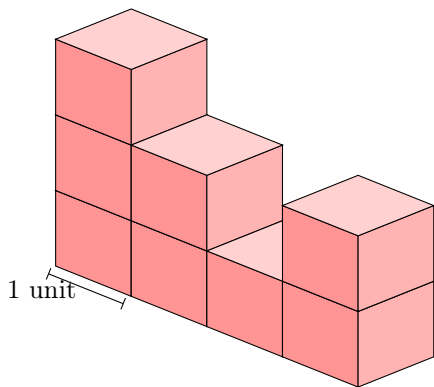
A.1 FINDING VOLUME OF A SOLID

Ex 1: What is the volume of the red solid?



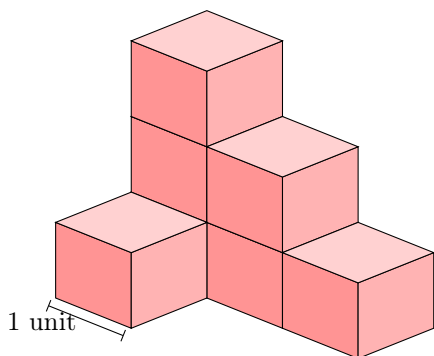
cubic units

Ex 2: What is the volume of the red solid?



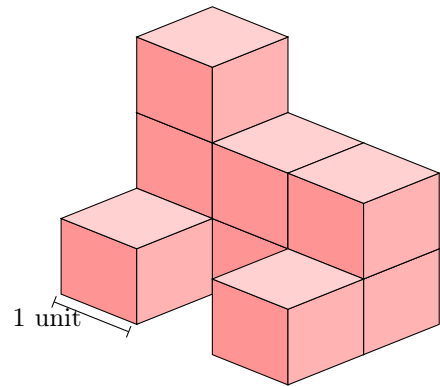
cubic units

Ex 3: What is the volume of the red solid?



cubic units

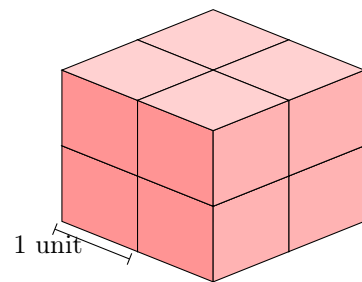
Ex 4: What is the volume of the red solid?



cubic units

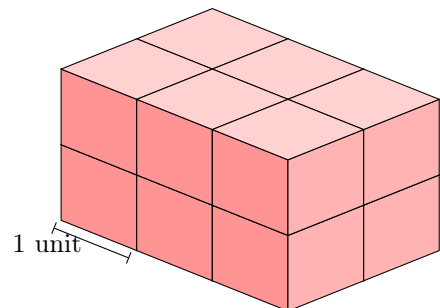
A.2 FINDING VOLUME OF A RECTANGULAR CUBOID

Ex 5: What is the volume of the red solid?



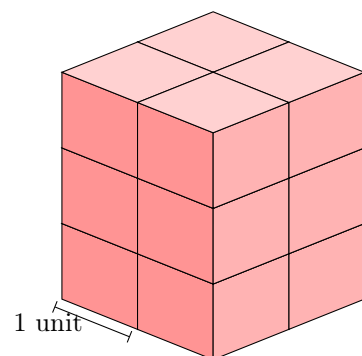
cubic units

Ex 6: What is the volume of the red solid?



cubic units

Ex 7: What is the volume of the red solid?



cubic units

Ex 8: What is the volume of the red solid?

