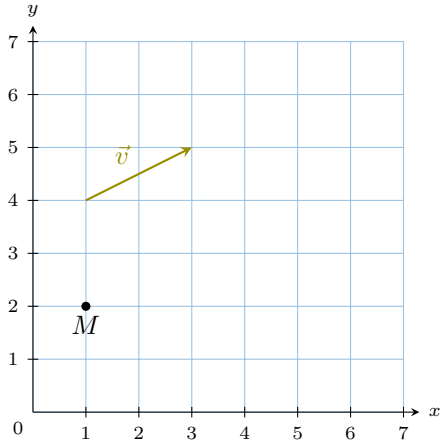


TRANSLATION

A WHAT IS A TRANSLATION?

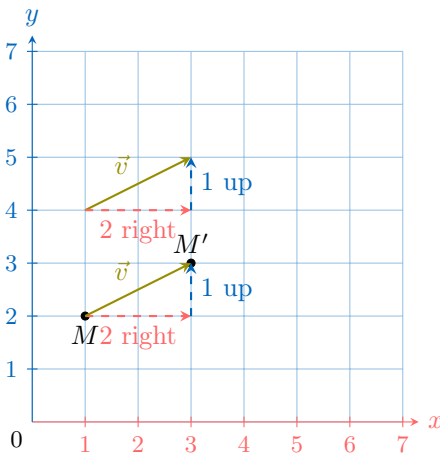
A.1 FINDING THE IMAGE OF A POINT

Ex 1: Find the coordinates of the image of point M under a translation by vector \vec{v} .



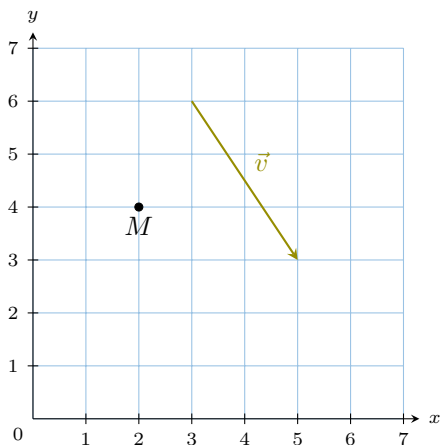
$$M'(\boxed{3}, \boxed{3})$$

Answer:



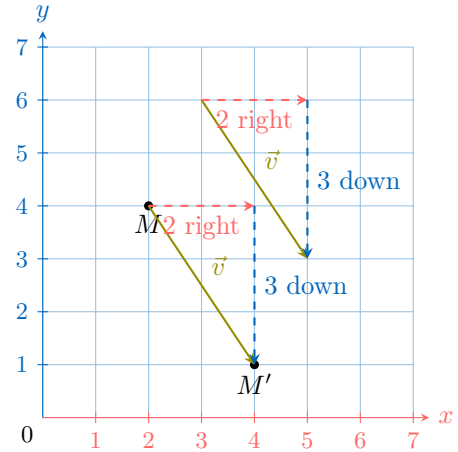
$$M'(\boxed{3}, \boxed{3})$$

Ex 2: Find the coordinates of the image of point M under a translation by vector \vec{v} .



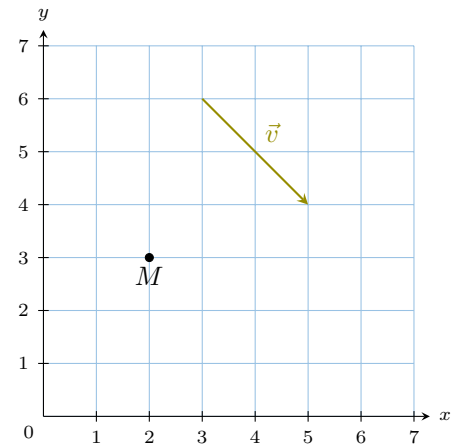
$$M'(\boxed{4}, \boxed{1})$$

Answer:



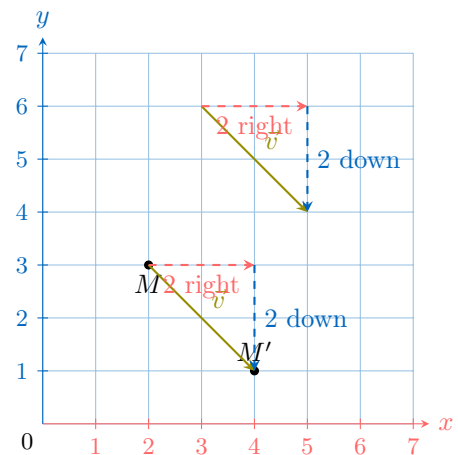
$$M'(\boxed{4}, \boxed{1})$$

Ex 3: Find the coordinates of the image of point M under a translation by vector \vec{v} .



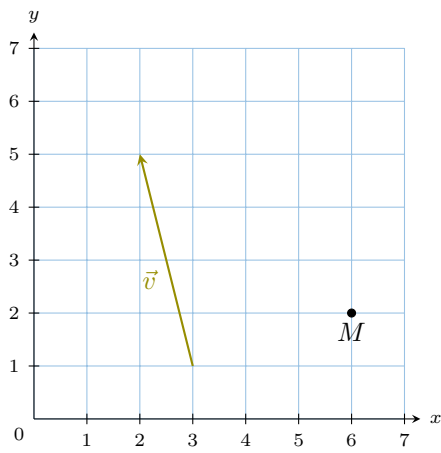
$$M'(\boxed{4}, \boxed{1})$$

Answer:



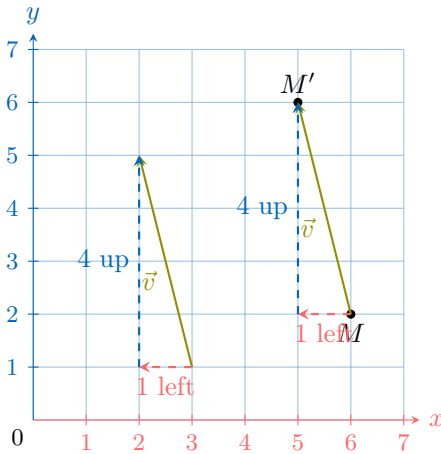
$$M'(\boxed{4}, \boxed{1})$$

Ex 4: Find the coordinates of the image of point M under a translation by vector \vec{v} .



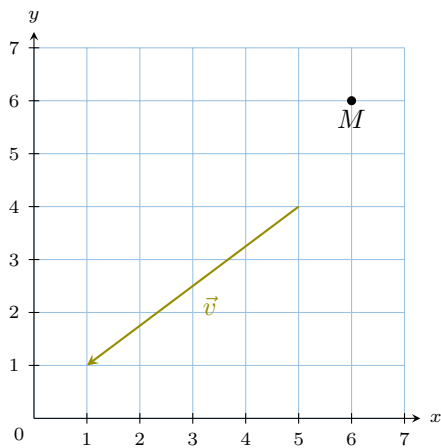
$$M'(\boxed{5}, \boxed{6})$$

Answer:



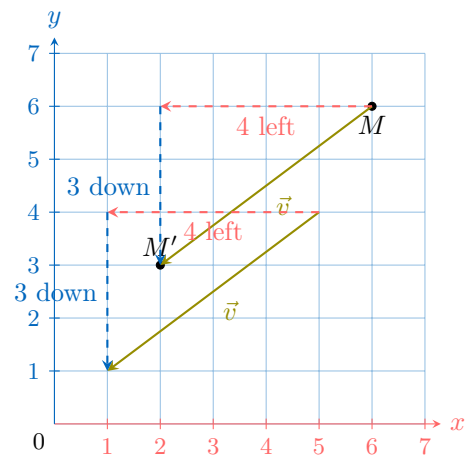
$$M'(\boxed{5}, \boxed{6})$$

Ex 5: Find the coordinates of the image of point M under a translation by vector \vec{v} .



$$M'(\boxed{2}, \boxed{3})$$

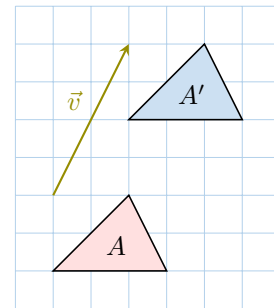
Answer:



$$M'(\boxed{2}, \boxed{3})$$

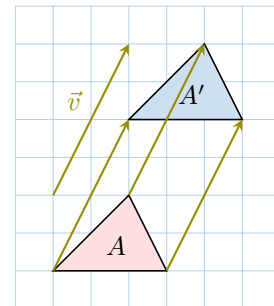
A.2 TRANSLATION OF FIGURES

MCQ 6: Is the figure A' the image of figure A under a translation by vector \vec{v} ?

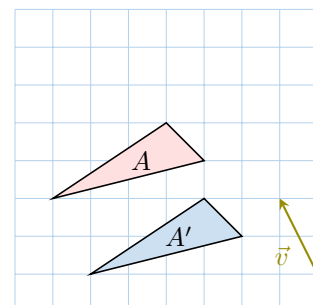


- ☒ Yes
☐ No

Answer: Yes

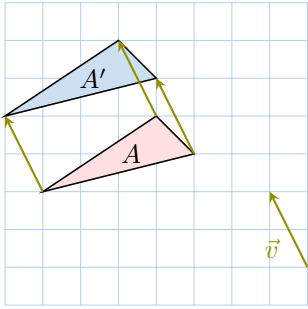


MCQ 7: Is the figure A' the image of figure A under a translation by vector \vec{v} ?

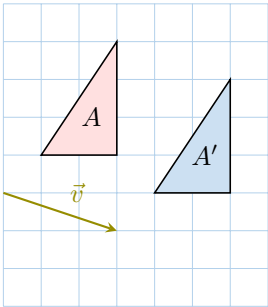


- ☐ Yes
☒ No

Answer: No, the figure A' is misplaced. Here is where it should be.

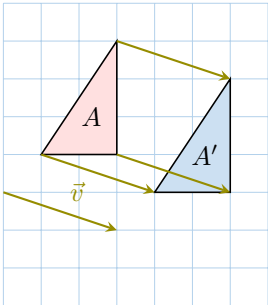


MCQ 8: Is the figure A' the image of figure A under a translation by vector \vec{v} ?

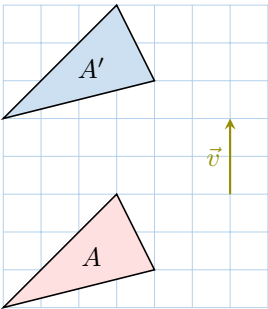


- ☒ Yes
- ☐ No

Answer: Yes

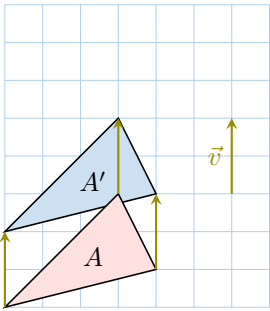


MCQ 9: Is the figure A' the image of figure A under a translation by vector \vec{v} ?



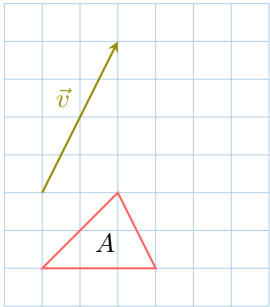
- ☐ Yes
- ☒ No

Answer: No, the figure A' is misplaced. Here is where it should be.



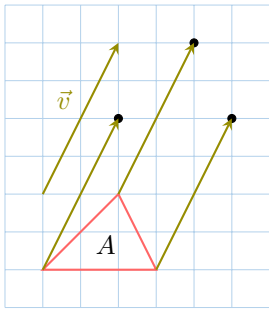
A.3 DRAWING THE IMAGES OF FIGURES

Ex 10: Draw the figure A' , the image of figure A under a translation by vector \vec{v} .

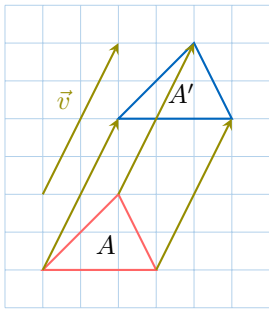


Answer:

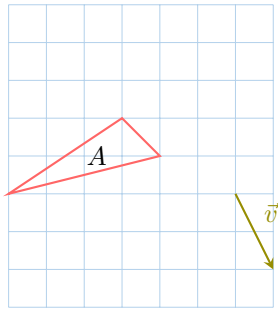
- 1. Draw the image vertices:** For each vertex, translate it by the vector \vec{v} by moving 2 units right and 4 units up from its original position. Place the new points on the grid.



- 2. Draw the image figure:** Connect the image vertices with lines in the same order as the original figure.

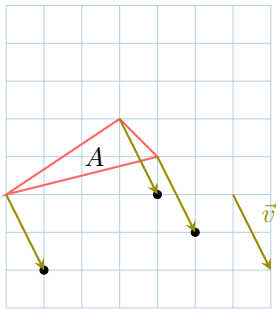


Ex 11: Draw the figure A' , the image of figure A under a translation by vector \vec{v} .

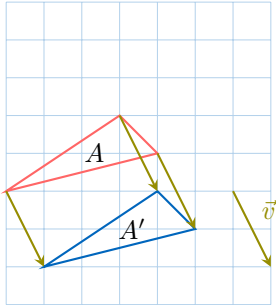


Answer:

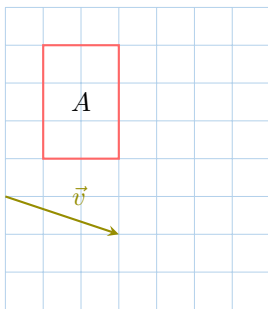
1. **Draw the image vertices:** For each vertex, translate it by the vector \vec{v} by moving 1 unit right and 2 units down from its original position. Place the new points on the grid.



2. **Draw the image figure:** Connect the image vertices with lines in the same order as the original figure.

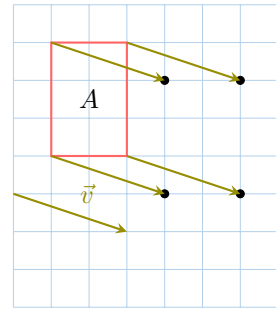


Ex 12: Draw the figure A' , the image of figure A under a translation by vector \vec{v} .

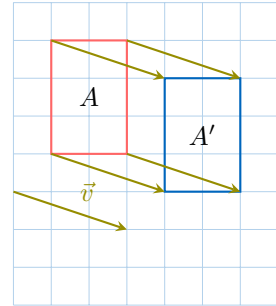


Answer:

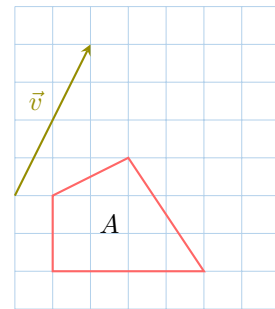
1. **Draw the image vertices:** For each vertex, translate it by the vector \vec{v} by moving 3 units right and 1 unit down from its original position. Place the new points on the grid.



2. **Draw the image figure:** Connect the image vertices with lines in the same order as the original figure.

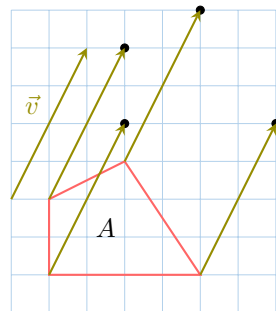


Ex 13: Draw the figure A' , the image of figure A under a translation by vector \vec{v} .



Answer:

1. **Draw the image vertices:** For each vertex, translate it by the vector \vec{v} by moving 2 units right and 4 units up from its original position. Place the new points on the grid.



2. **Draw the image figure:** Connect the image vertices with lines in the same order as the original figure.

