

SHAPES

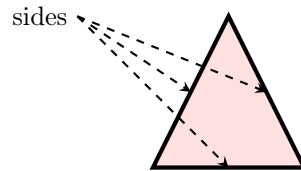
You will learn to:

- **Name** four shapes: circle, triangle, square, rectangle.
- **Count and tell** how many **sides** and **corners** each shape has.

A SIDES AND VERTICES

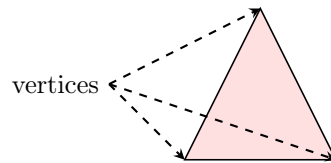
Definition Side

A **side** is a straight line on a shape.







Definition

Vertex



B SHAPES

Definition Shapes

Name	Shape	Side Number	Vertex Number
Circle		0	0
Triangle		3	3
Square		4 (all the same)	4
Rectangle		4 (2 longer, 2 shorter)	4