


PROBABILITY

A OUTCOME

A.1 LISTING ALL POSSIBLE OUTCOMES

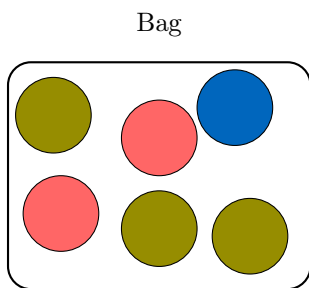
MCQ 1: Look at this die: . If you roll it, what are all the possible outcomes?

- ☐ 1, 2, 3, 4, 5
- ☐ 1, 2, 3, 4, 5, 6, 7
- ☒ 1, 2, 3, 4, 5, 6

Answer:

- A die has six sides, numbered 1 to 6.
- So, all possible outcomes are: 1, 2, 3, 4, 5, 6.

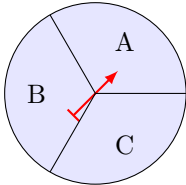
MCQ 2: Imagine a bag with balls: 2 red, 1 blue, and 3 green. If you pick one ball without looking, what are all the possible colors you could get?



- ☒ Red, Blue, Green
- ☐ 2 Red, 1 Blue, 3 Green
- ☐ Red, Red, Blue, Green, Green, Green

Answer:

- The possible outcomes are the different colors: Red, Blue, Green.
- We don't list the same color more than once because we're looking for possible colors, not how many of each.

MCQ 3: Look at this spinner: . What are all the possible letters it could land on?

- ☐ A, B
- ☐ A, C
- ☒ A, B, C

Answer:

- The spinner has three sections: A, B, and C.

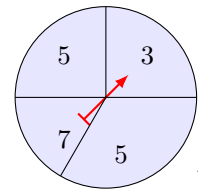
- So, the possible outcomes are A, B, and C.

MCQ 4: If you pick a letter from the word "PAPA," what are all the possible letters you could pick?

- ☐ P, A, P, A
- ☐ P, A, P
- ☒ P, A

Answer:

- The distinct letters in "PAPA" are P and A.
- So, the possible outcomes are P and A.



MCQ 5: Look at this spinner: What are all the possible numbers it could land on?

- ☐ 3, 5, 7, 7
- ☐ 3, 5, 5, 7
- ☒ 3, 5, 7

Answer:

- The spinner has sections with numbers 3, 5, 7, and another 5.
- But for outcomes, we list each different number once: 3, 5, 7.

MCQ 6: A couple is expecting a baby. They don't know if it will be a boy or a girl. What are all the possible outcomes for the baby's gender?

- ☐ Boy
- ☒ Girl, Boy
- ☐ Girl

Answer:

- The possible outcomes are: Girl, Boy.

MCQ 7: If you pick a letter from the word "APPLE," what are all the possible letters you could pick?

- ☒ P, A, L, E
- ☐ P, P, A, L, E
- ☐ A, P, L
- ☐ A, L, E, P, P

Answer:

- The distinct letters in "APPLE" are P, A, L, E.

- So, the possible outcomes are P, A, L, E.

MCQ 8: If you pick a letter randomly from the word "BANANA," what are all the possible letters you could pick?

- ☒ B, N, A
- ☐ B, A, N, A, N, A
- ☐ A, B, N, A, B, N

Answer:

- The distinct letters in "BANANA" are B, A, N.
- So, the possible outcomes can be listed as B, N, A (order doesn't matter).

B EVENT

B.1 IDENTIFYING OUTCOMES FOR DIE-ROLLING EVENTS

MCQ 9: If you roll a die, what are the outcomes for the event "getting a 3"?

- ☐ 1, 3, 5
- ☐ 2, 3, 4
- ☐ 1, 2, 3
- ☒ 3

Answer: The outcomes for the event "getting a 3" are 3.

MCQ 10: If you roll a die, what are the outcomes for the event "getting a 5 or 6"?

- ☒ 5, 6
- ☐ 4, 5, 6
- ☐ 1, 2, 3
- ☐ 3, 4, 5

Answer: The outcomes for the event "getting a 5 or 6" are 5 and 6.

MCQ 11: If you roll a die, what are the outcomes for the event "not getting a 6"?

- ☐ 2, 3, 4
- ☐ 1, 2, 3, 4, 5, 6
- ☒ 1, 2, 3, 4, 5
- ☐ 1, 3, 5

Answer: The outcomes for the event "not getting a 6" are 1, 2, 3, 4, and 5.

MCQ 12: If you roll a die, what are the outcomes for the event "getting a number greater than or equal to 4"?

- ☐ 1, 2, 3
- ☒ 4, 5, 6

- ☐ 3, 4, 5
- ☐ 2, 3, 4

Answer: The outcomes for the event "getting a number greater than or equal to 4" are 4, 5, and 6.

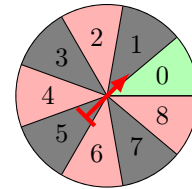
MCQ 13: If you roll a die, what are the outcomes for the event "even number"?

- ☐ 1, 3, 5
- ☒ 2, 4, 6
- ☐ 1, 2, 3, 4, 5, 6
- ☐ 2, 3, 4, 5

Answer: The outcomes for the event "even number" are 2, 4, and 6.

B.2 IDENTIFYING OUTCOMES IN A CASINO SPINNER

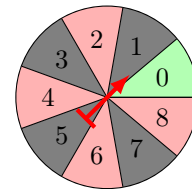
MCQ 14: If you spin the spinner below, what are the outcomes for the event "getting a 2"?



- ☒ 2
- ☐ 1, 2, 3
- ☐ 2, 4, 6
- ☐ 0, 1, 2

Answer: The outcomes for the event "getting a 2" are 2.

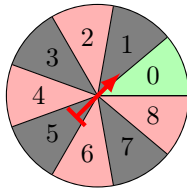
MCQ 15: If you spin the spinner below, what are the outcomes for the event "not getting a 4"?



- ☐ 1, 2, 3, 4
- ☒ 0, 1, 2, 3, 5, 6, 7, 8
- ☐ 2, 4, 6, 8
- ☐ 4, 5, 6

Answer: The outcomes for the event "not getting a 4" are 0, 1, 2, 3, 5, 6, 7, and 8.

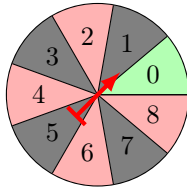
MCQ 16: If you spin the spinner below, what are the outcomes for the event "red"?



- ☐ 1, 3, 5, 7
- ☐ 0
- ☒ 2, 4, 6, 8
- ☐ 1, 2, 3, 4

Answer: The outcomes for the event "red" are 2, 4, 6, and 8.

MCQ 17: If you spin the spinner below, what are the outcomes for the event "getting an odd number"?



- ☐ 0, 1, 3
- ☐ 2, 4, 6, 8
- ☐ 1, 2, 3, 4
- ☒ 1, 3, 5, 7

Answer: The outcomes for the event "getting an odd number" are 1, 3, 5, and 7.

C USING WORDS TO DESCRIBE PROBABILITY

C.1 FINDING THE PROBABILITY IN A DRAWING EXPERIMENT

MCQ 18: What is the chance of picking a red candy from a bag with 4 red candies and 4 blue candies?



Choose one answer:

- ☐ Impossible
- ☐ Less Likely
- ☒ Even Chance
- ☐ Most Likely

☐ Certain

Answer: The correct answer is "Even Chance." Since there are the same number of red and blue candies, you have an equal chance of picking a red candy.

MCQ 19: What is the chance of picking a blue candy from a bag with 4 red candies and 4 blue candies?




Choose one answer:

- ☐ Impossible
- ☐ Less Likely
- ☒ Even Chance
- ☐ Most Likely
- ☐ Certain

Answer: The correct answer is "Even Chance." Since there are the same number of red and blue candies, you have an equal chance of picking a blue candy.

MCQ 20: What is the chance of picking a blue candy from a bag with 9 red candies and 1 blue candy?




Choose one answer:

- ☐ Impossible
- ☒ Less Likely
- ☐ Even Chance
- ☐ Most Likely
- ☐ Certain

Answer: The correct answer is "Less Likely." Since there are many more red candies than blue candies, you have a small chance of picking a blue candy.

MCQ 21: What is the chance of picking a red candy from a bag with 9 red candies and 1 blue candy?



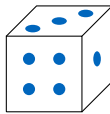
Choose one answer:

- ☐ Impossible
- ☐ Less Likely
- ☐ Even Chance
- ☒ Most Likely
- ☐ Certain

Answer: The correct answer is "Most Likely." Since there are many more red candies than blue candies, you have a big chance of picking a red candy.

C.2 FINDING THE PROBABILITY IN A DICE EXPERIMENT

MCQ 22: What is the chance of getting a 3 when you roll a die?

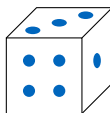


Choose one answer:

- ☐ Impossible
- ☒ Less Likely
- ☐ Even Chance
- ☐ Most Likely
- ☐ Certain

Answer: The correct answer is "Less Likely." Since there are six numbers on a die, you have a small chance of rolling a 3.

MCQ 23: What is the chance of **not** getting a 3 when you roll a die?

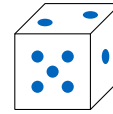


Choose one answer:

- ☐ Impossible
- ☐ Less Likely
- ☐ Even Chance
- ☒ Most Likely
- ☐ Certain

Answer: The correct answer is "Most Likely." Since there are six numbers on a die and five of them are not 3, you have a big chance of rolling a 1, 2, 4, 5, or 6.

MCQ 24: What is the chance of getting an even number (2, 4, or 6) when you roll a die?

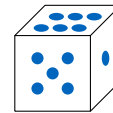


Choose one answer:

- ☐ Impossible
- ☐ Less Likely
- ☒ Even Chance
- ☐ Most Likely
- ☐ Certain

Answer: The correct answer is "Even Chance." Since there are six numbers on a die and three of them are even, you have an equal chance of getting an even number or an odd number.

MCQ 25: What is the chance of getting a 7 when you roll a die?



Choose one answer:

- ☒ Impossible
- ☐ Less Likely
- ☐ Even Chance
- ☐ Most Likely
- ☐ Certain

Answer: The correct answer is "Impossible." Since there are only six numbers on a die, from 1 to 6, you can't roll a 7.

D USING NUMBERS TO QUANTIFY PROBABILITY

D.1 DESCRIBING PROBABILITIES WITH WORDS

MCQ 26: The probability of winning a game is $\frac{1}{10}$. Find the word to describe this probability.

- ☐ Impossible
- ☒ Less Likely
- ☐ Even Chance
- ☐ Most Likely
- ☐ Certain

Answer: The correct answer is "Less Likely." The probability of winning is $\frac{1}{10}$, which means you have the chance to win 1 game out of 10 games played. So, it's Less Likely.

MCQ 27: The probability of winning a game is $\frac{4}{5}$. Find the word to describe this probability.

- ☐ Impossible
- ☐ Less Likely
- ☐ Even Chance
- ☒ Most Likely
- ☐ Certain

Answer: The correct answer is "Most Likely." The probability of winning is $\frac{4}{5}$, which means you have the chance to win 4 games out of 5 games played. So, it's Most Likely.

MCQ 28: The probability of winning a game is $\frac{1}{2}$. Find the word to describe this probability.

- ☐ Impossible
- ☐ Less Likely
- ☒ Even Chance
- ☐ Most Likely
- ☐ Certain

Answer: The correct answer is "Even Chance." The probability of winning is $\frac{1}{2}$, which means you have the chance to win 1 game out of 2 games played. So, it's an Even Chance.

MCQ 29: The probability of winning a game is 0. Find the word to describe this probability.

- ☒ Impossible
- ☐ Less Likely
- ☐ Even Chance
- ☐ Most Likely
- ☐ Certain

Answer: The correct answer is "Impossible." The probability of winning is 0, which means you have no chance to win the game. So, it's Impossible.

MCQ 30: The probability of winning a game is 1. Find the word to describe this probability.

- ☐ Impossible
- ☐ Less Likely
- ☐ Even Chance
- ☐ Most Likely
- ☒ Certain

Answer: The correct answer is "Certain." The probability of winning is 1, which means you will definitely win the game. So, it's Certain.

D.2 MAKING DECISIONS USING PROBABILITIES

MCQ 31: Louis advises you to play because the probability of winning this game is $\frac{3}{4}$. Do you follow his advice?

- ☒ Yes
- ☐ No

Answer: The correct answer is "Yes." The probability of winning is $\frac{3}{4}$, which means you have the chance to win 3 games out of 4 games played. So it is most likely. Therefore, it's a good idea to follow Louis's advice and play.

MCQ 32: Louis advises you to play because the probability of winning this game is $\frac{1}{4}$. Do you follow his advice?

- ☐ Yes
- ☒ No

Answer: The correct answer is "No." The probability of winning is $\frac{1}{4}$, which means you have the chance to win 1 game out of 4 games played. So it is less likely. Therefore, it's not a good idea to follow Louis's advice and play.

MCQ 33: The probability of succeeding a penalty is $\frac{1}{2}$ for Louis and $\frac{3}{4}$ for Hugo. Which player do you choose to take the penalty?

- ☐ Louis
- ☒ Hugo

Answer: The correct answer is "Hugo." The probability of succeeding for Louis is $\frac{1}{2}$, which means he has an even chance to succeed. For Hugo, it's $\frac{3}{4}$, which means he is most likely to succeed because he has the chance to succeed in 3 out of 4 penalties. So, Hugo is the better choice to take the penalty.

MCQ 34: The probability of succeeding a penalty is $\frac{1}{4}$ for Louis and $\frac{3}{5}$ for Hugo. Which player do you choose to take the penalty?

- ☐ Louis
- ☒ Hugo

Answer: The correct answer is "Hugo." The probability of succeeding for Louis is $\frac{1}{4}$, which means he is less likely to succeed because he has the chance to succeed in 1 out of 4 penalties. For Hugo, it's $\frac{3}{5}$, which means he is most likely to succeed because he has the chance to succeed in 3 out of 5 penalties. So, Hugo is the better choice to take the penalty.