

LENGTHS

A COMPARING LENGTHS

A.1 COMPARING CHILDREN'S HEIGHTS

Ex 1:



The girl is ☐ shorter than ☐ taller than the boy.

Ex 2:



The girl is ☐ shorter than ☐ taller than the boy.

Ex 3:



The girl is ☐ shorter than ☐ taller than the boy.


Ex 4:



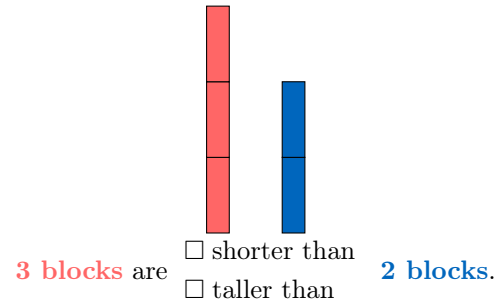
The girl is ☐ shorter than ☐ taller than the boy.

A.2 COMPARING BLOCK'S HEIGHTS

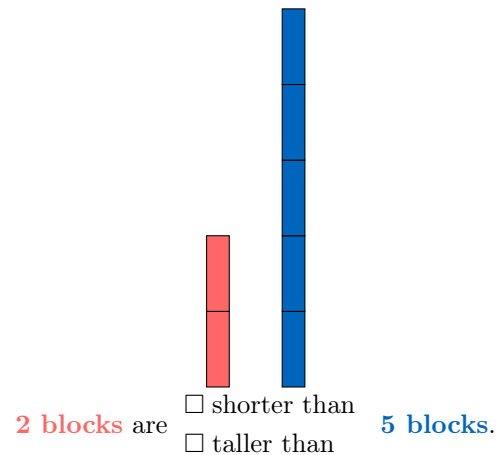
Ex 5:



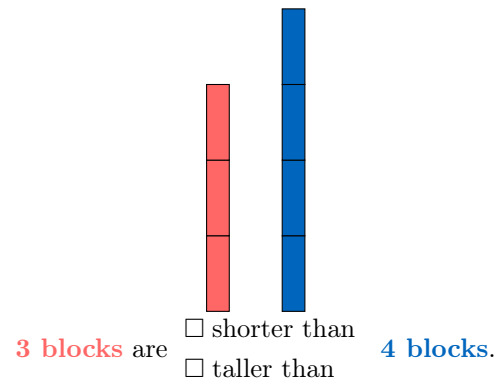
Ex 6:



Ex 7:



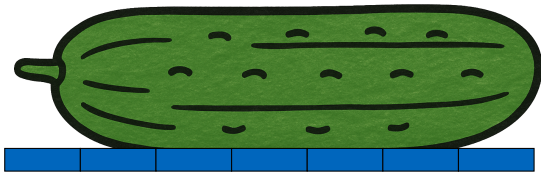
Ex 8:



B MEASURING LENGTHS

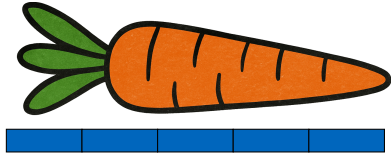
B.1 MEASURING LENGTHS WITH BLOCKS

Ex 9: How long?



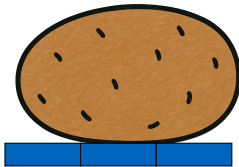
blocks long

Ex 10: How long?




blocks long

Ex 11: How long?

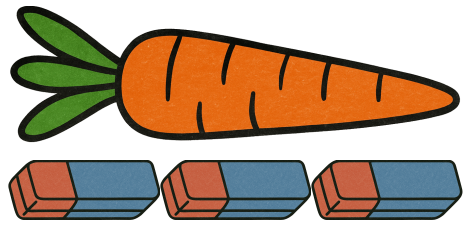


blocks long

Ex 12: How long?




blocks long




erasers long

Ex 15: How long?



erasers long


Ex 16: How long?



erasers long

B.2 MEASURING LENGTHS WITH ERASERS

Ex 13: How long?



erasers long

Ex 14: How long?