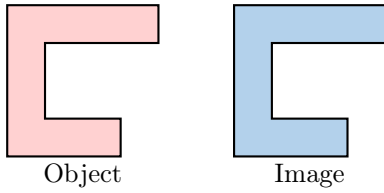


TRANSFORMATIONS

A TYPES OF TRANSFORMATIONS

A.1 IDENTIFYING TYPES OF TRANSFORMATIONS

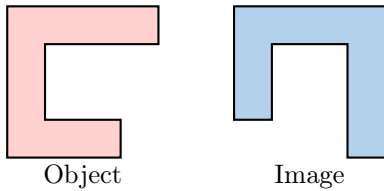
MCQ 1: Which transformation is shown in the diagram?



Choose the correct answer:

- ☐ Translation
- ☐ Rotation
- ☐ Reflection

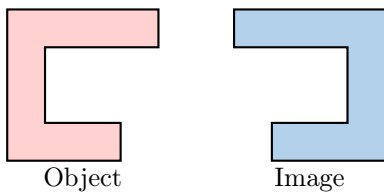
MCQ 2: Which transformation is shown in the diagram?



Choose the correct answer:

- ☐ Translation
- ☐ Rotation
- ☐ Reflection

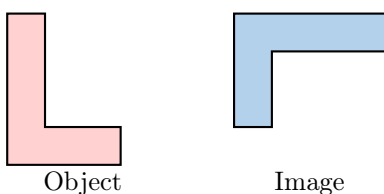
MCQ 3: Which transformation is shown in the diagram?



Choose the correct answer:

- ☐ Translation
- ☐ Rotation
- ☐ Reflection

MCQ 4: Which transformation is shown in the diagram?

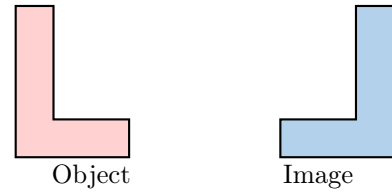


Choose the correct answer:

- ☐ Translation

- ☐ Rotation
- ☐ Reflection

MCQ 5: Which transformation is shown in the diagram?




Choose the correct answer:

- ☐ Translation
- ☐ Rotation
- ☐ Reflection


B PATTERNS

B.1 DRAWING PATTERNS


Ex 6: Complete the pattern:




Ex 7: Complete the pattern:




Ex 8: Complete the pattern:



Ex 9: Complete the pattern:

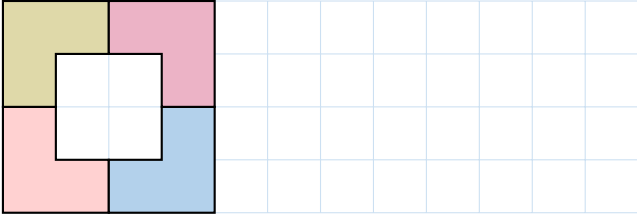


Ex 10: Complete the pattern:

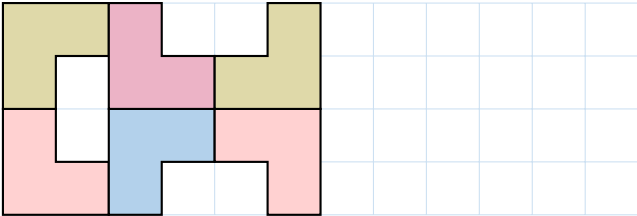


B.2 DRAWING PATTERNS ON TWO ROWS

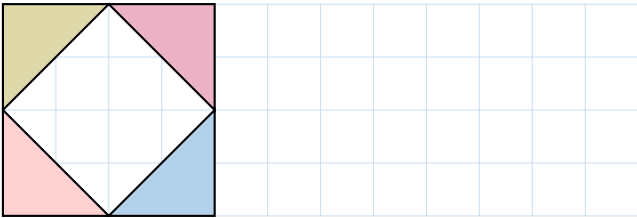
Ex 11: Complete the pattern :



Ex 12: Complete the pattern :



Ex 13: Complete the pattern :



Ex 14: Complete the pattern :

