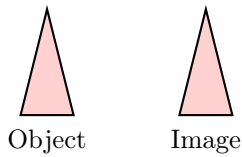


TRANSFORMATIONS

A TYPES OF TRANSFORMATIONS

A.1 IDENTIFYING TYPES OF TRANSFORMATIONS

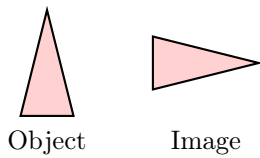
MCQ 1: Which transformation is shown in the diagram?



Choose the correct answer:

- ☐ Translation
- ☐ Rotation

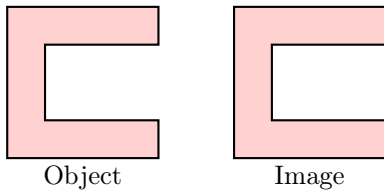
MCQ 2: Which transformation is shown in the diagram?



Choose the correct answer:

- ☐ Translation
- ☐ Rotation

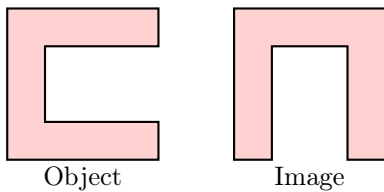
MCQ 3: Which transformation is shown in the diagram?



Choose the correct answer:

- ☐ Translation
- ☐ Rotation

MCQ 4: Which transformation is shown in the diagram?




Choose the correct answer:

- ☐ Translation
- ☐ Rotation


B PATTERNS

B.1 DRAWING PATTERNS


Ex 5: Complete the pattern:



Ex 6: Complete the pattern:



Ex 7: Complete the pattern:



Ex 8: Complete the pattern:

