


DIVISION


A EQUAL SHARES

A.1 SHARING APPLES


Ex 1:




Ex 2:



Ex 3:



Ex 4:



A.2 SHARING ITEMS

Ex 5: Share the cherries:




between the friends




How many for each friend?

Ex 6: Share the flowers:



into the vases



How many in each?

Ex 7: Share the lemons:



between the friends



How many for each friend?

**Ex 8:** Share the oranges:




into the boxes




How many in each box?

**Ex 9:** Share the flowers:




into the vases



How many in each?

### A.3 COMPLETING THE NUMBER SENTENCES

**Ex 10:** Share the flowers into the vases:



shared between  is .

**Ex 11:** Share the marbles between the friends:



shared between  is .

**Ex 12:** Share the cookies onto the plates:



shared between  is .

**Ex 13:** Share the oranges into the boxes:



shared between  is .