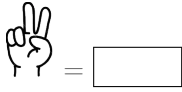


# COUNTING 1 TO 5

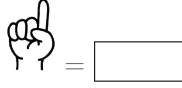
## A WHAT IS COUNTING?

### A.1 COUNTING THE FINGERS

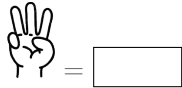
Ex 1:



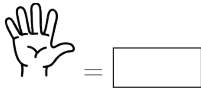
Ex 2:




Ex 3:



Ex 4:

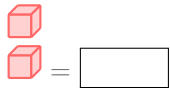


Ex 5:

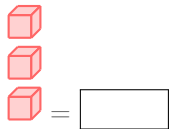


### A.2 COUNTING THE CUBES

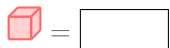
Ex 6:



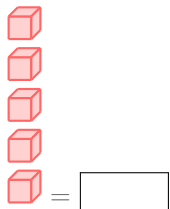
Ex 7:



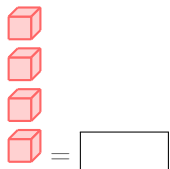
Ex 8:



Ex 9:

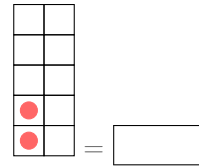


Ex 10:

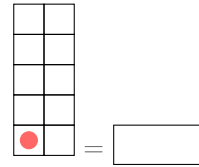


### A.3 COUNTING THE CIRCLES

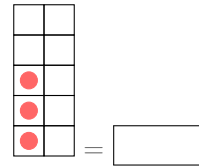
Ex 11:



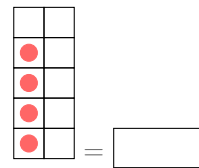
Ex 12:



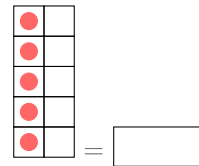
Ex 13:



Ex 14:



Ex 15:



## B HOW TO COUNT?

### B.1 COUNTING THE FRUITS

Ex 16:



Ex 17:



Ex 18:




Ex 19:



Ex 20:



Ex 21:




Ex 22:




## B.2 COUNTING THE KIDS

Ex 23:



Ex 24:



Ex 25:



Ex 26:

