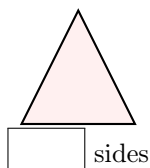


SHAPES

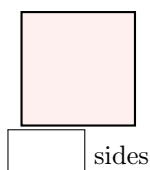
A SIDES AND VERTICES

A.1 FINDING THE SIDES

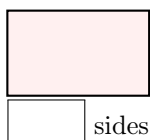
Ex 1: How many sides does this shape have?



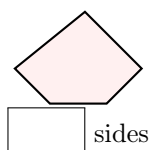
Ex 2: How many sides does this shape have?



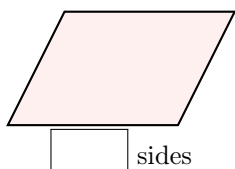
Ex 3: How many sides does this shape have?



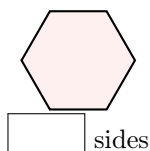
Ex 4: How many sides does this shape have?



Ex 5: How many sides does this shape have?

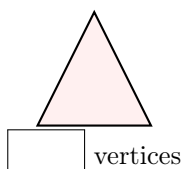


Ex 6: How many sides does this shape have?

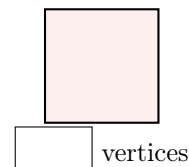


A.2 FINDING THE VERTICES

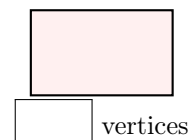
Ex 7: How many vertices does this shape have?



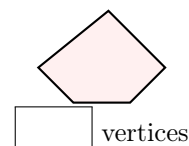
Ex 8: How many vertices does this shape have?



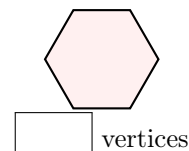
Ex 9: How many vertices does this shape have?



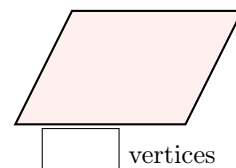
Ex 10: How many vertices does this shape have?



Ex 11: How many vertices does this shape have?



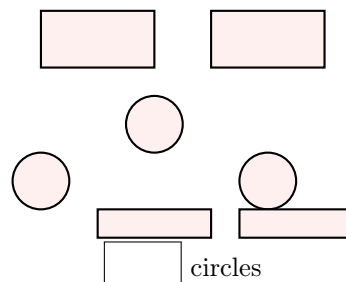
Ex 12: How many vertices does this shape have?



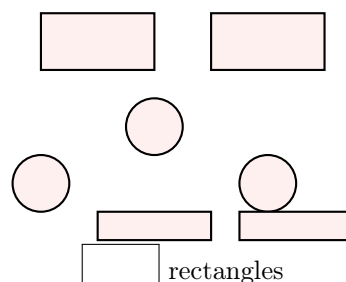
B CLASSIFICATION

B.1 FINDING THE SHAPES

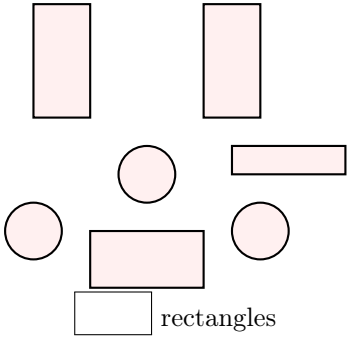
Ex 13: How many circles are in the picture?



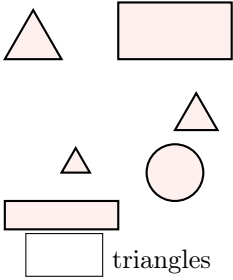
Ex 14: How many rectangles are in the picture?



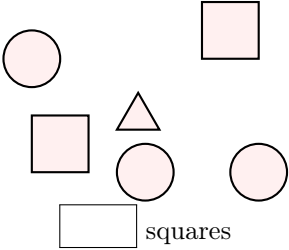
Ex 15: How many rectangles are in the picture?




Ex 16: How many triangles are in the picture?




Ex 17: How many squares are in the picture?



Ex 20: Can you find all the rectangles in the picture?



Ex 21: Can you find all the squares in the picture?



B.2 FINDING THE SHAPES

Ex 18: Can you find all the circles in the picture?



Ex 19: Can you find all the triangles in the picture?

